


سلسلة الحاسب واكتب

1 2 3



1 واحد

1

1

1

1

1

1

1

1

1

1

1

1

1

1

1

1

1

1



2 اثنان

2

2

2

2

2

2

2

2

2

2

2

2

2

2

2

2

2

2



ثلاثة

3

3

3

3

3

3

3

3

3

3

3

3

3

3

3

3

3

3

3



4 أربعة

4

4

4

4

4

4

4

4

4

4

4

4

4


4

4

4

4

4



خمسة 5

5

5

5

5

5

5

5

5

5

5

5

5

5

5

5

5

5

5

5

5

5

5

5

5

5

5

5

5

5

5

5

5

5

5

5

5



ستة 6

6

6

6

6

6

6

6

6

6

6

6

6

6

6

6

6

6

6



7 سبعة

7

7

7

7

7

7

7

7

7

7

7

7

7

7

7

7

7

7

7

7

7

7

7

7

7

7

7

7

7

7

7

7

7

7

7

7



ثمانية 8

8

8

8

8

8

8

8

8

8

8

8

8

8







8

8

8

8

8



٩ تسعة

٩

٩

٩

٩

٩

٩

٩

٩

٩

٩

٩

٩

٩

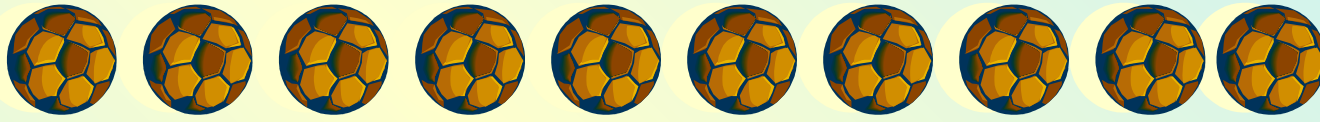
٩

٩

٩

٩

٩



عشرة 10

10

10

10

10

10

10

10

10

10

10

10

10

10

10

10

10

10

10



11 إحدی عشر



11

11

11

11

11

11

11

11

11

11

11

11

11

11

11

11

11

11



12 اثني عشر

12

12

12

12

12

12

12

12

12

12

12

12

12

12

12

12

12

12

12

12

12

12

12

12

12

12

12

12

12

12

12





12

12




12

12

12



13 ثلاثة عشر



13

13

13

13

13

13

13

13

13

13

13

13

13

13

13

13

13

13



14 أربعة عشر

14

14

14

14

14

14

14

14

14

14

14

14

14

14

14

14

14

14

14

14

14

14

14

14

14

14

14

14

14

14

14


14

14

14

14

14



15 خمسة عشر

15

15

15

15

15

15

15

15

15

15

15

15

15

15

15

15

15

15



16 ستة عشر

16

16

16

16

16

16

16

16

16

16

16

16

16


16

16

16

16

16



17 سبع عشر 

17

17

17

17

17

17

17

17

17

17

17

17

17


17

17

17

17

17



18 ثمانية عشر

18

18

18

18

18

18

18

18

18

18

18

18

18

18

18

18

18

18



19 تسعة عشر



19

19

19

19

19

19

19

19

19

19

19

19

19

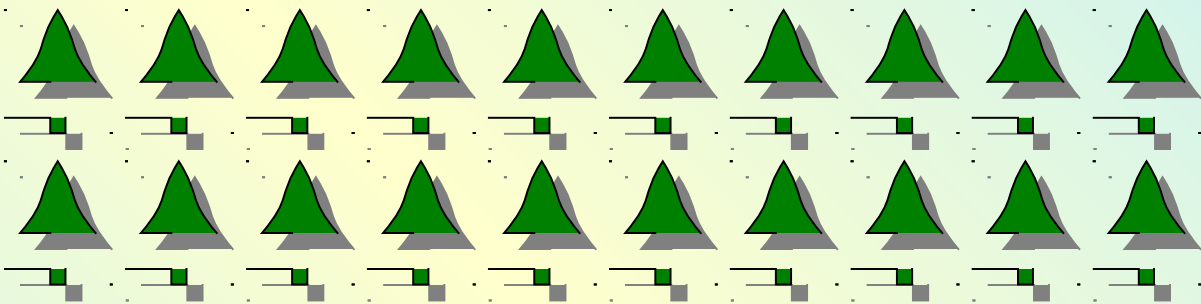
19

19

19

19

19



عشرون 20

20

20

20

20

20

20

20

20

20

20

20

20

20

20

20

20

20

20

20	20	20	20	20	20
20	20	20	20	20	20
20	20	20	20	20	20



21 واحد وعشرون

21

21

21

21

21

21

21

21

21

21

21

21

21

21

21

21

21

21

21

21

21

21

21

21

21

21

21

21

21

21

21

21

21

21

21

21

21

21

21

21

21

21



22 اثنان وعشرون

22

22

22

22

22

22

22

22

22

22

22

22

22

22


22

22

22

22

22	22	22	22	22	22
22	22	22	22	22	22
22	22	22	22	22	22



23 ثلاثة وعشرون

23

23

23

23

23

23

23

23

23

23

23

23

23


23

23

23

23

23



24 أربع وعشرون

24

24

24

24

24

24

24

24

24

24

24

24

24

24

24

24

24

24

24

24

24

24

24

24

24

24

24

24

24

24

24


24

24

24

24

24



25 خمس وعشرون

25	25	25	25	25	25
25	25	25	25	25	25
25	25	25	25	25	25



26 ستة وعشرون

26

26

26

26

26

26

26

26

26

26

26

26

26

26

26

26

26

26

26

26

26

26

26

26

26

26

26

26

26

26

26

26

26

26

26

26

26

26

26

26

26

26



27 سبعة وعشرون

27

27

27

27

27

27

27

27

27

27

27

27

27

27

27

27

27

27

27

27

27

27

27

27

27

27

27

27

27

27

27


27

27

27

27

27



28 ثمان وعشرون

28

28

28

28

28

28

28

28

28

28

28

28

28

28

28

28

28

28



29 تسعة وعشرون

29

29

29

29

29

29

29

29

29

29

29

29

29

29

29

29

29

29



30 ثلاثون

30

30

30

30

30

30

30

30

30

30

30

30

30

30

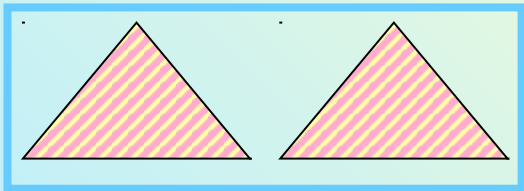

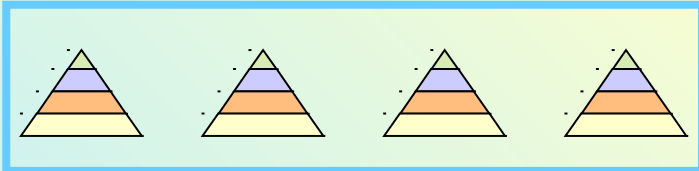

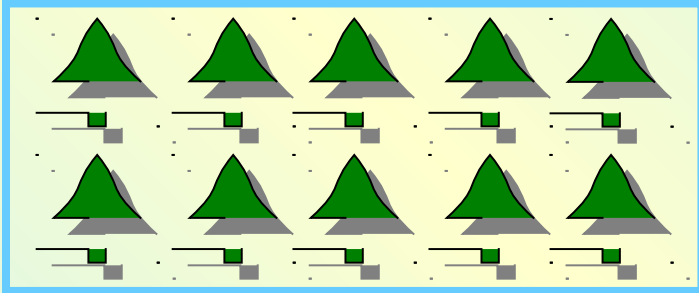
30

30



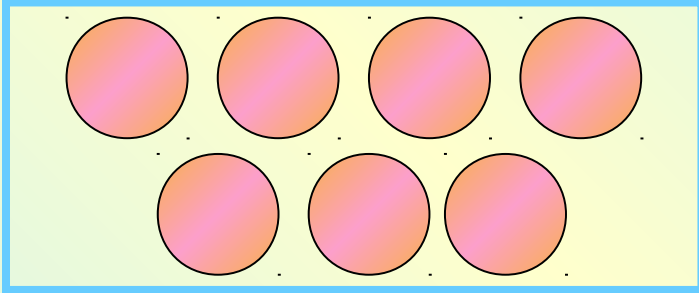
30

30


عد واكتب



عد واكتب



من الرقم والمجموعة المساوية له



15

16

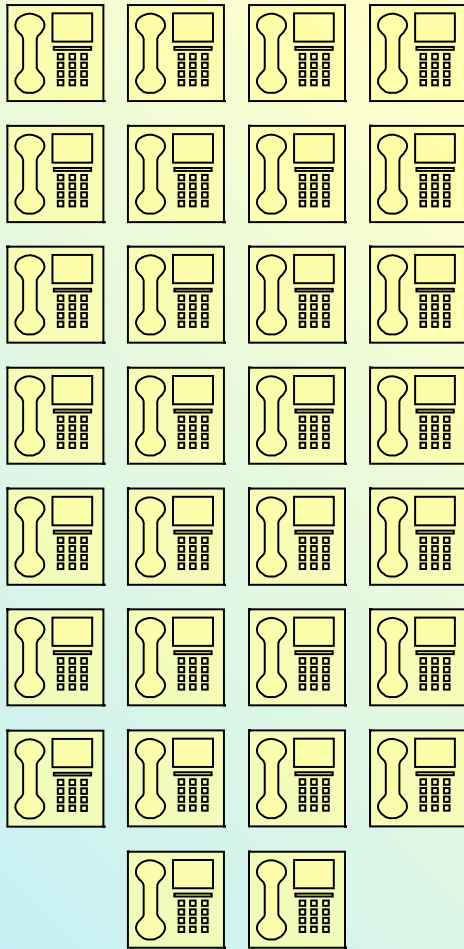


18

20




من الرقم والمجموعة المساوية له



30

29



املئ الفراغات

6			3	2	1
12		10		8	7
	17	16			13
24	23		21		19
30		28		26	

